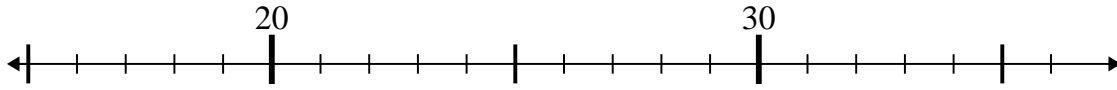




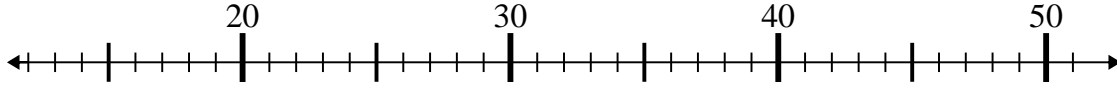
Use the numberlines to solve each problem.

Answers

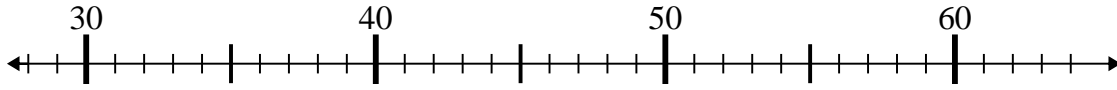
1) $32 - 3 =$



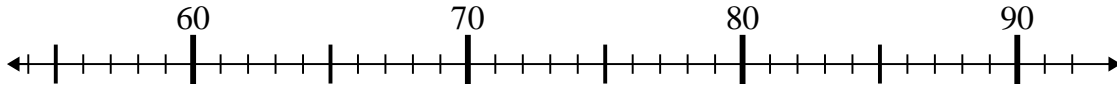
2) $15 + 2 =$



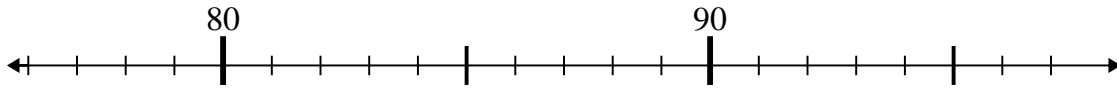
3) $34 + 7 =$



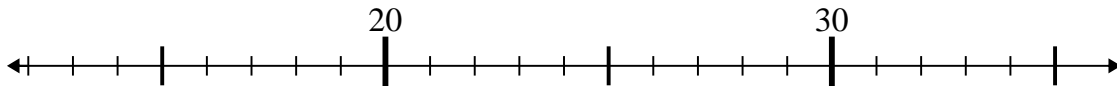
4) $71 + 8 =$



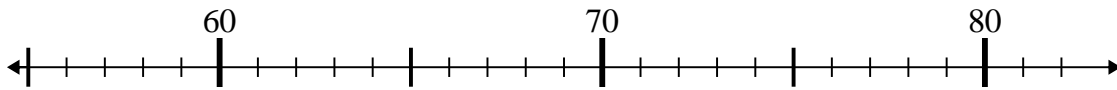
5) $81 + 1 =$



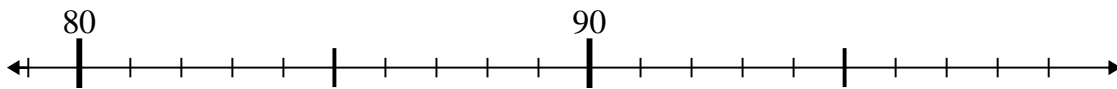
6) $27 - 5 =$



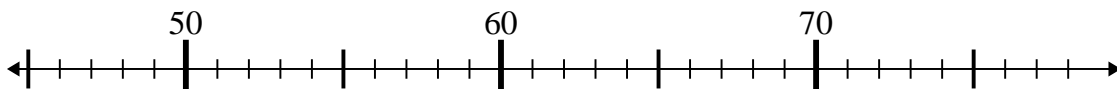
7) $61 - 6 =$



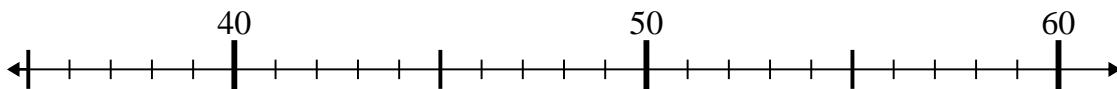
8) $92 - 5 =$



9) $67 - 22 =$



10) $38 + 11 =$

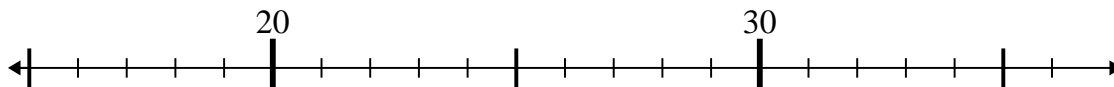


- 1. _____
- 2. _____
- 3. _____
- 4. _____
- 5. _____
- 6. _____
- 7. _____
- 8. _____
- 9. _____
- 10. _____

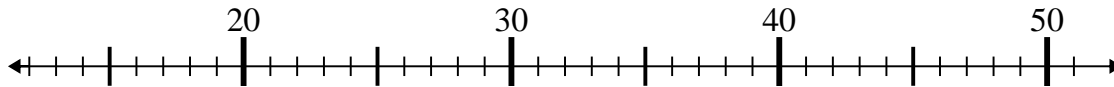


Use the numberlines to solve each problem.

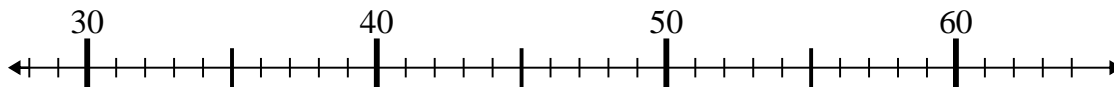
1) $32 - 3 =$



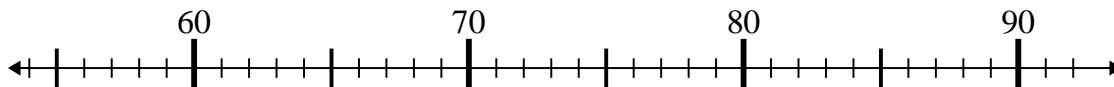
2) $15 + 2 =$



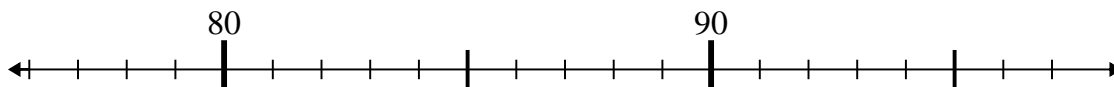
3) $34 + 7 =$



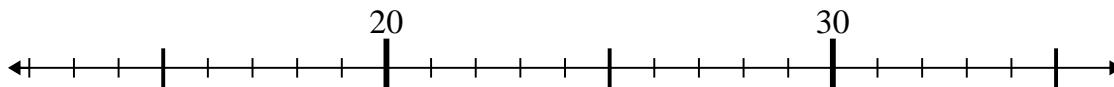
4) $71 + 8 =$



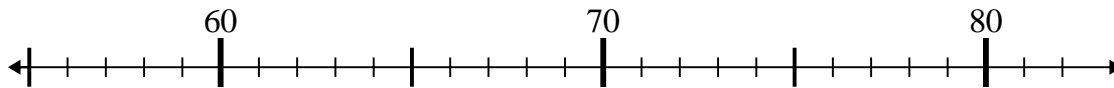
5) $81 + 1 =$



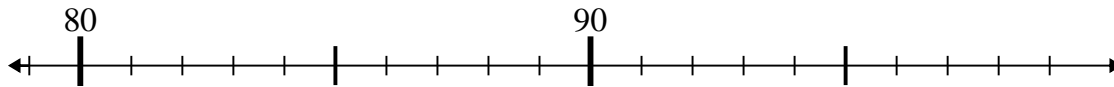
6) $27 - 5 =$



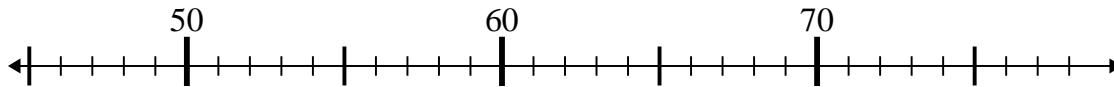
7) $61 - 6 =$



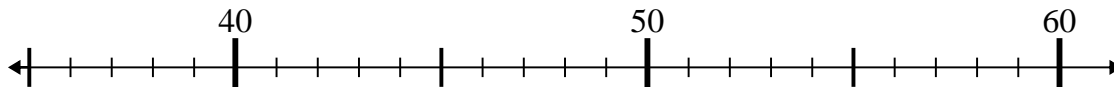
8) $92 - 5 =$



9) $67 - 22 =$



10) $38 + 11 =$



Answers

1. 29

2. 17

3. 41

4. 79

5. 82

6. 22

7. 55

8. 87

9. 45

10. 49